

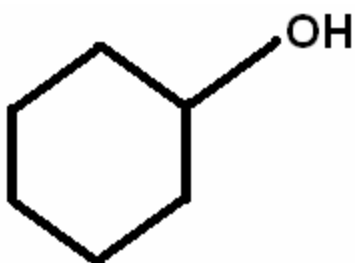
## Organic Compound Naming Worksheet

Write the name of each of the following organic compounds:

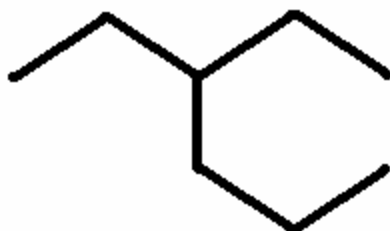
1)



2)



3)



Write the structures for the following organic molecules:

4) methylcyclopentane

5) 2-ethyl-2-pentene

6) diethylamine

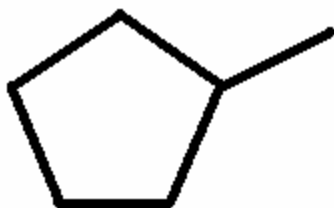
## Organic Compound Naming Worksheet - Answers

Write the name of each of the following organic compounds:

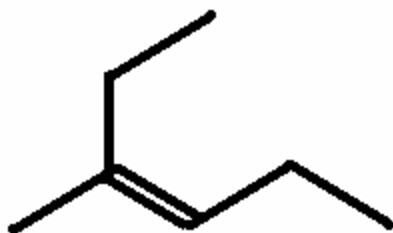
- 1) **3-methylpentane**
- 2) **cyclohexanol**
- 3) **3-ethylhexane**

Write the structures for the following organic molecules:

- 4) methylcyclopentane



- 5) 2-ethyl-2-pentene



- 6) diethylamine

