

Resonance Structures Practice

Draw all of the possible resonance structures for the following ions or molecules:

1) nitrate ion:

2) formate ion (CHO_2^{-1}):

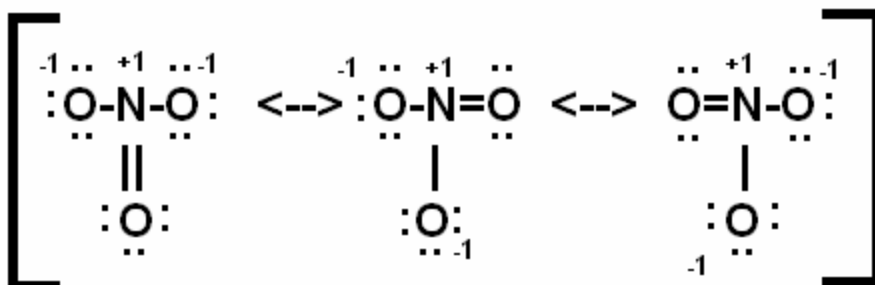
3) cyclobutadiene (C_4H_4):

4) ozone (O_3):

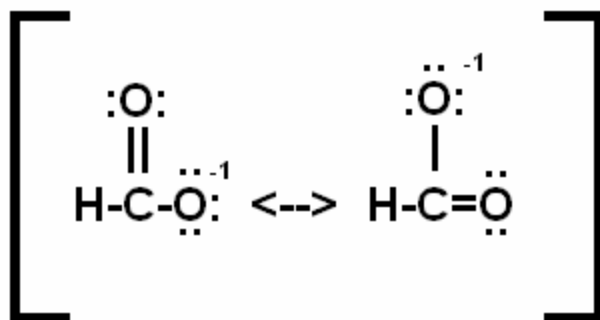
Resonance Structures Practice

Draw all of the possible resonance structures for the following ions or molecules:

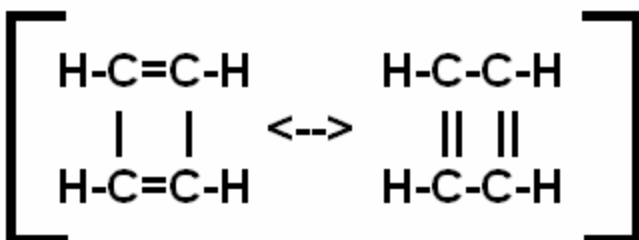
1) nitrate ion:



2) formate ion (CHO_2^{-1}):



3) cyclobutadiene (C_4H_4):



4) ozone (O_3):

